

VIDYA BHAWAN BALIKA VIDYAPEETH

CLASS-1

SUBJECT-MATHEMATICS

DATE-25-02-2021

BY-KIRTI KUMARI

BASED ON NCERT PATTERN









REVISION

PAGE NO.-74

EXERCISE-

Count and write the things in each group and add:

The image shows a 3x3 grid of addition problems. Each problem consists of two boxes on the left, a plus sign, a third box, an equals sign, and a fourth box. The first box contains a certain number of items, the second box contains another number, and the fourth box is empty for the student to write the sum.

	+		=	
	+		=	
	+		=	